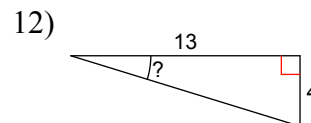
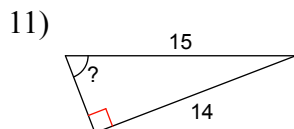
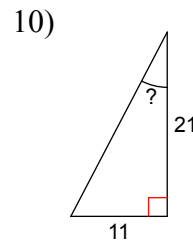
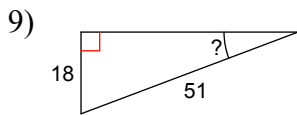
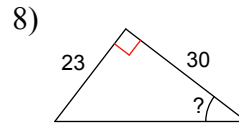
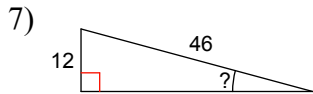
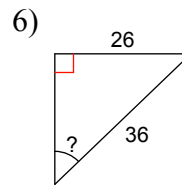
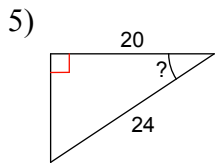
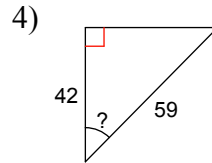
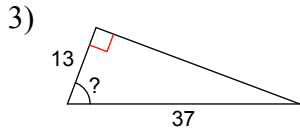
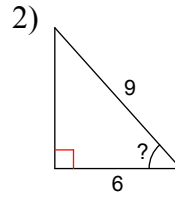
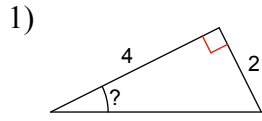


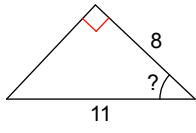
Geometry

WS Finding Angles

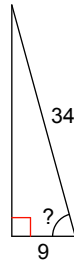
Find the measure of the indicated angle to the nearest degree.



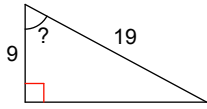
13)



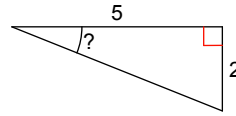
14)



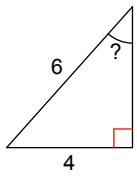
15)



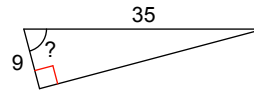
16)



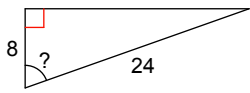
17)



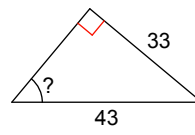
18)



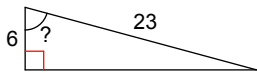
19)



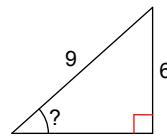
20)



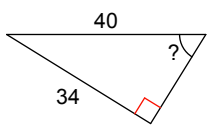
21)



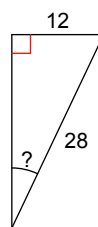
22)



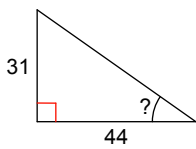
23)



24)



25)



Answers to WS Finding Angles

1) 27°
5) 34°
9) 21°
13) 43°
17) 42°
21) 75°
25) 35°

2) 48°
6) 46°
10) 28°
14) 75°
18) 75°
22) 42°

3) 69°
7) 15°
11) 69°
15) 62°
19) 71°
23) 58°

4) 45°
8) 37°
12) 17°
16) 22°
20) 50°
24) 25°